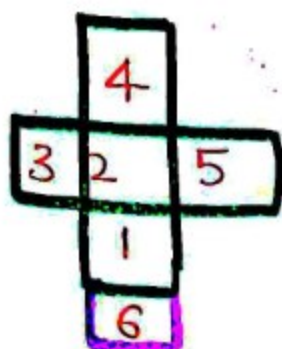


(CHAPTER- DICE)



4-1
2-6
3-5



a)



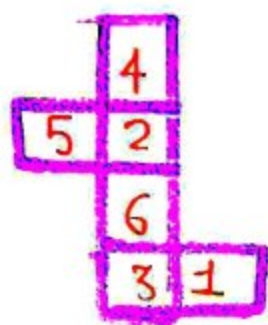
b)



c)



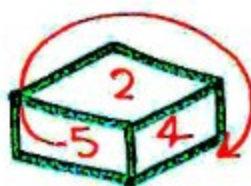
d)



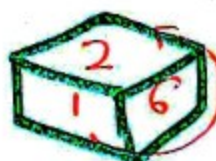
4-6
2-3
1-5



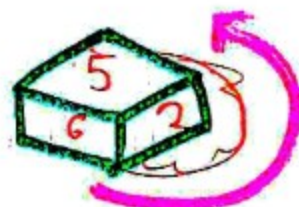
1-3-6
A.C.W



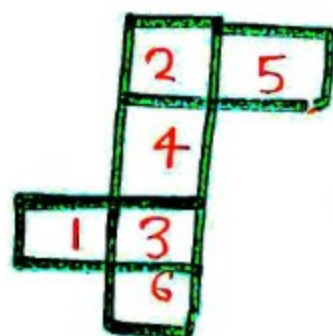
5-2-4
C.W



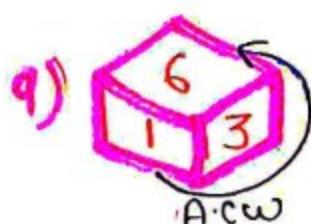
1-6-2
A.C.W



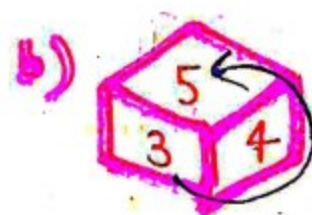
A.C.W



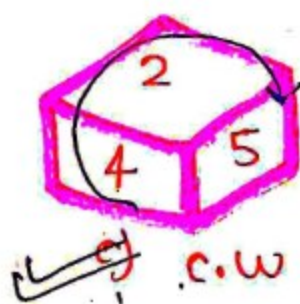
2-3
4-6
1-5



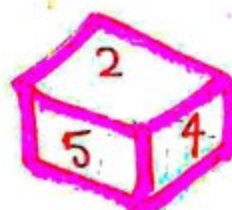
A.C.W



3-4-5
A.C.W




c) C.W




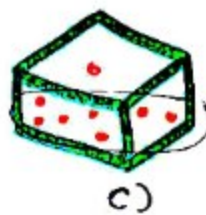
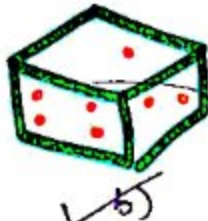
d)

ROJGAR WITH ANKIT

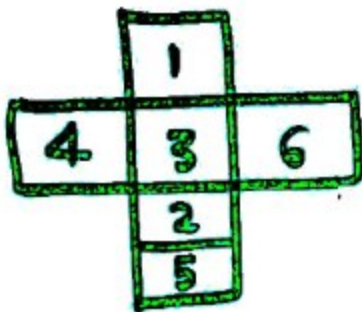
1) यदि नीचे दी गयी आकृति को मोड़कर एक पैसा बनाया जाये तो निर्मित पैसे विकल्पों में से किस आकृति के समान होगा ?



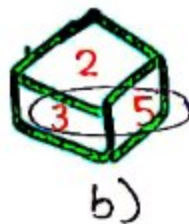
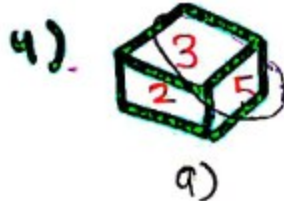
1 - 6
2 - 5
3 - 4



2.)

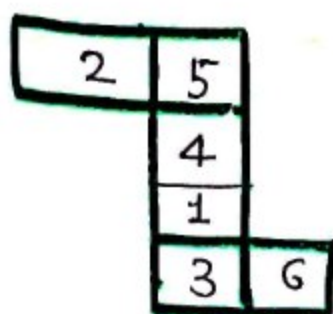


1 - 2
3 - 5
4 - 6



ROJGAR WITH ANKIT

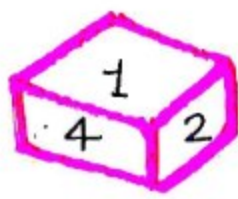
3>



5-1
4-3
2-6



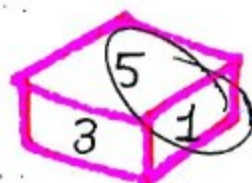
a)



b)

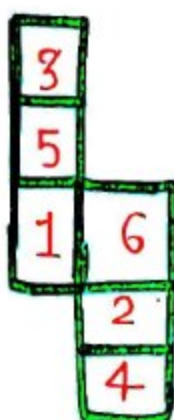


c)



d)

4>



3-1
6-4
2-5

केवल B और C



a)



b)

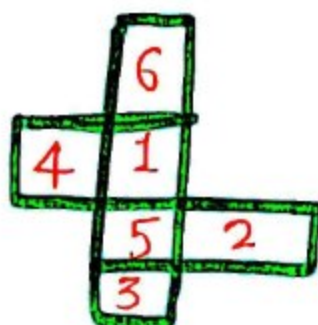


c)

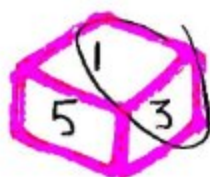


d)

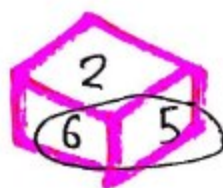
5>



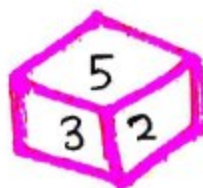
6-5
1-3
4-2



a)



b)



c)

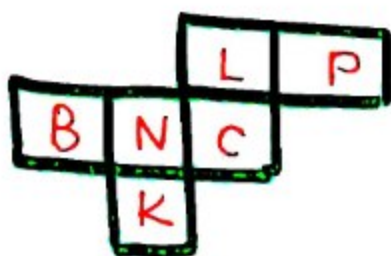


d)

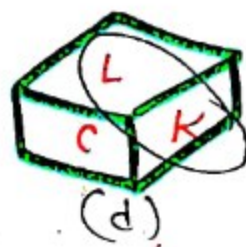
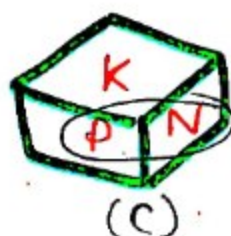
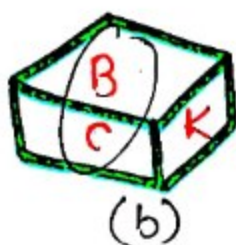
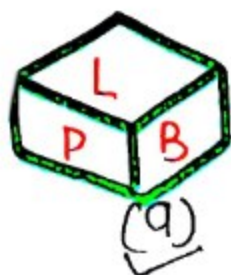
केवल c और d

ROJGAR WITH ANKIT

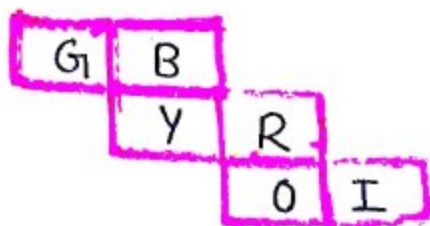
6)



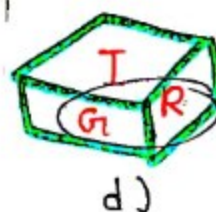
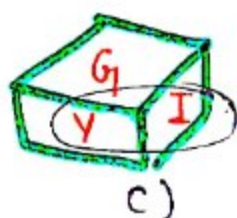
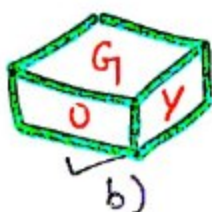
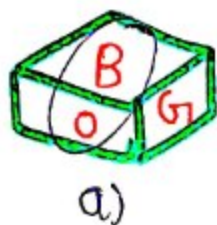
B - C
N - P
L - K



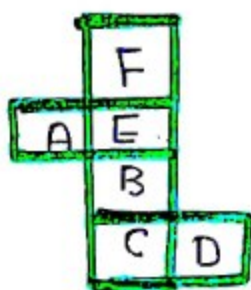
7)



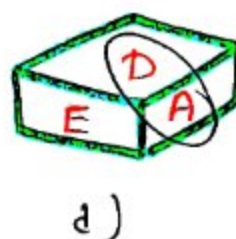
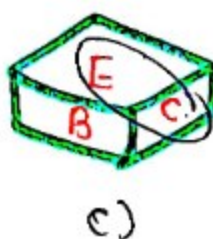
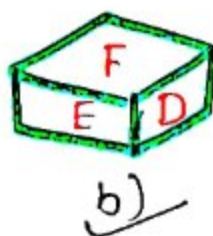
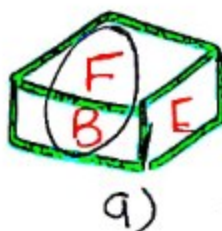
G - R
Y - I
O - B



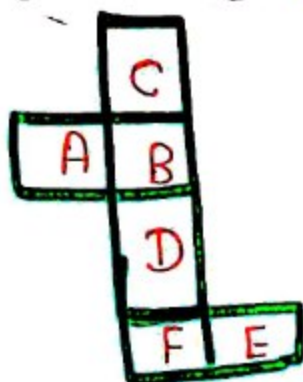
8)



F - B
E - C
A - D



9) प्रश्न आकृतया



D-C
F-B
E-A

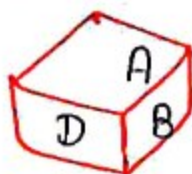
उत्तर -



(i)



(ii)

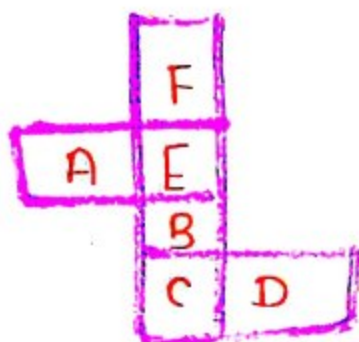


(iii)



(iv)

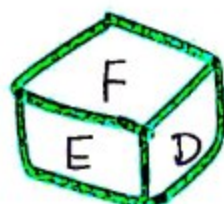
10)



F-B
E-C
A-D



(i)



(ii)



(iii)



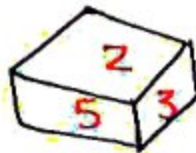
(iv)

(केवल ii)

ROJGAR WITH ANKIT

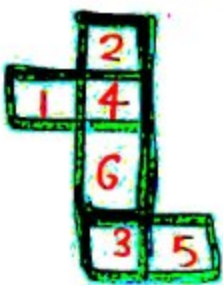
नीचे पासे की दो स्थितियाँ दी गयी हैं। पासे पर 1 से लेकर 6 तक अंकित हैं। विकल्पों में चार संभावित चित्र दिये गये हैं। यदि पासा की सतहों को खोल दिया जाये। तो वह किस विकल्प के समान दिखेगा।

प्रश्न आकृतियाँ →

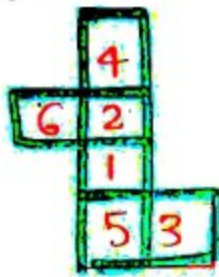


2 - 1 - 4
~~2~~ - 3 - 5
 6

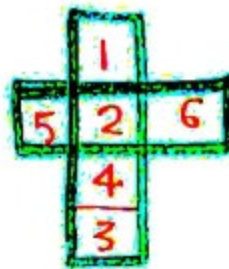
उत्तर आकृतियाँ →




a)



b)



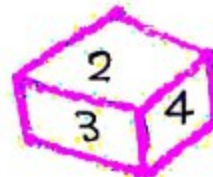
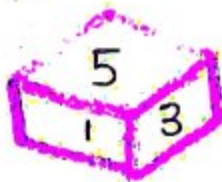
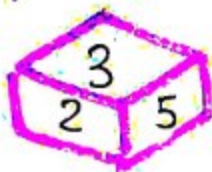
c)



d)

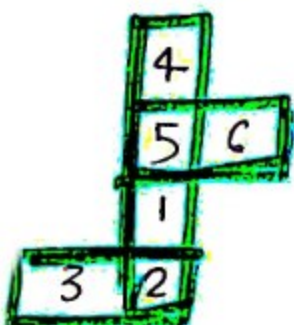
प्रश्न आकृतियाँ →

12)

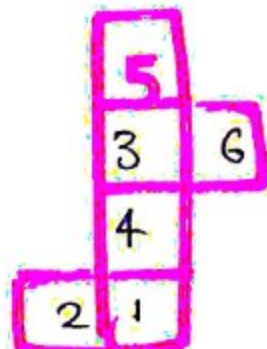


3 - 1 - 5
~~3~~ - 2 - 4
 6

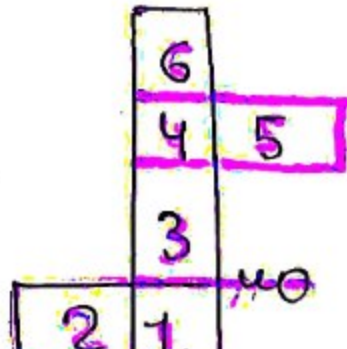
उत्तर आकृतियाँ →



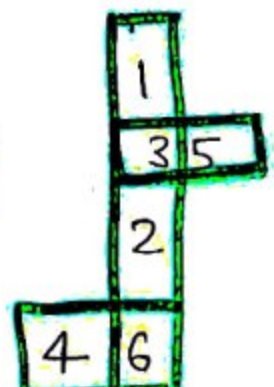
a)



b)




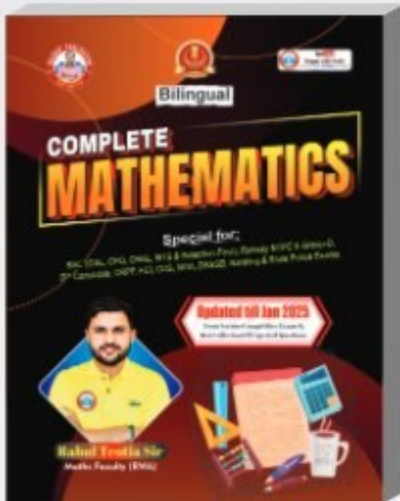
c)





d)



General Titles



BUY NOW



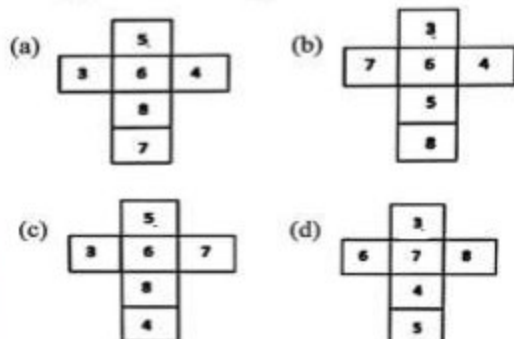
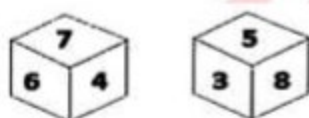
Follow us on



Rojgar with Ankit

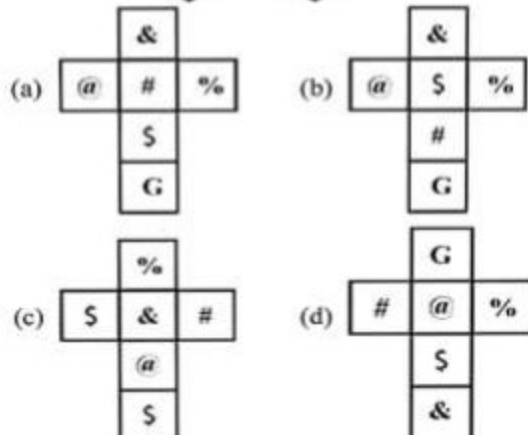
1. Two orientations of the same box are shown. How will this box look when opened?

एक ही बॉक्स के दो अभिविन्यास दिखाए गए हैं। खुला होने पर यह बॉक्स कैसा दिखेगा?



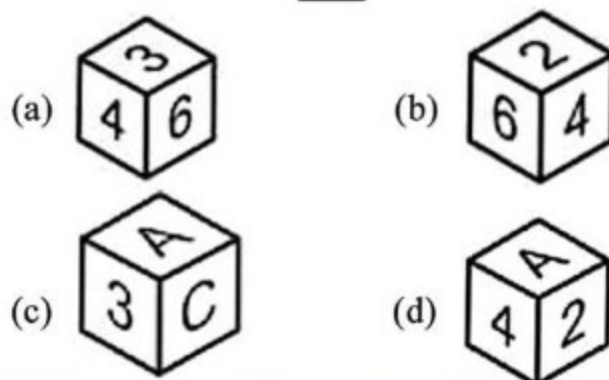
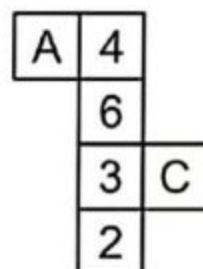
2. Two orientations of a dice are shown. Which option figure can be obtained by folding this dice along the lines?

एक पासे के दो अभिविन्यास दिखाए गए हैं। यह पासा किस विकल्प अकृति को रेखाओं के अनुदिश मोड़कर प्राप्त किया जा सकता है?



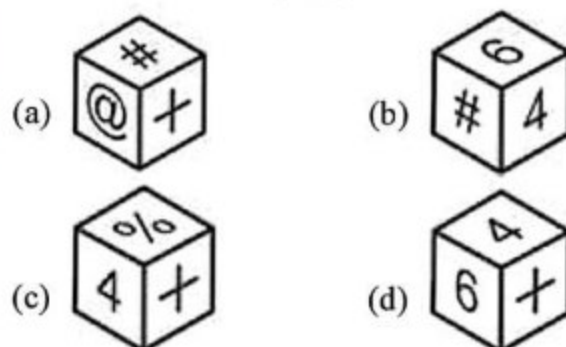
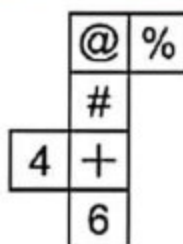
3. Which box can be formed by folding the given paper?

दिये हुए पेपर को मोड़ने पर कौन-सा बॉक्स बन सकता है।



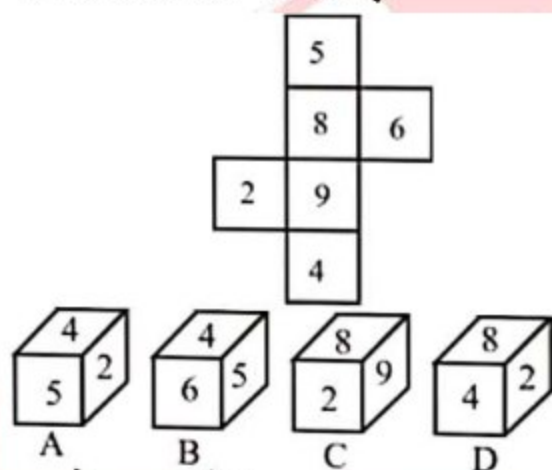
4. Which box can be formed by folding the given paper?

दिये हुए पेपर को मोड़ने पर कौन-सा बॉक्स बन सकता है।



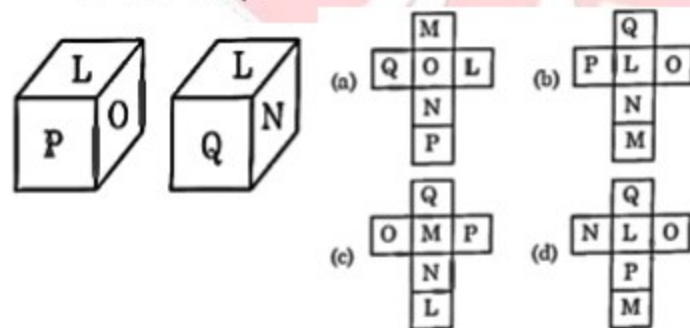
5. Select the dice which can be obtained by folding the following sheet along the lines.

उस पासे का चयन करें, जिसे निम्नांकित पत्रक (शीट) को रेखाओं पर मोड़ने पर प्राप्त किया जा सकता है।



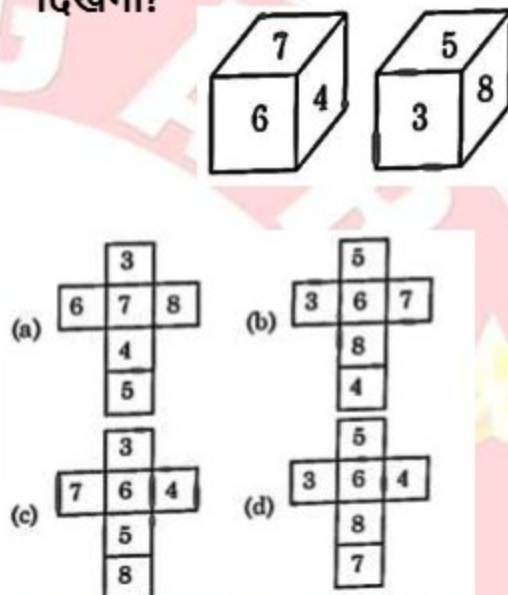
- (a) केवल C और D
(b) केवल C
(c) B, C और D
(d) केवल D
6. Two positions of the same dice are shown. Which option figure can be obtained by folding this dice along the lines?

एक ही पासे की दो स्थितियां दिखाई गई हैं। यह पासा किस विकल्प आकृति को रेखाओं के अनुदिश मोड़कर प्राप्त किया जा सकता है?

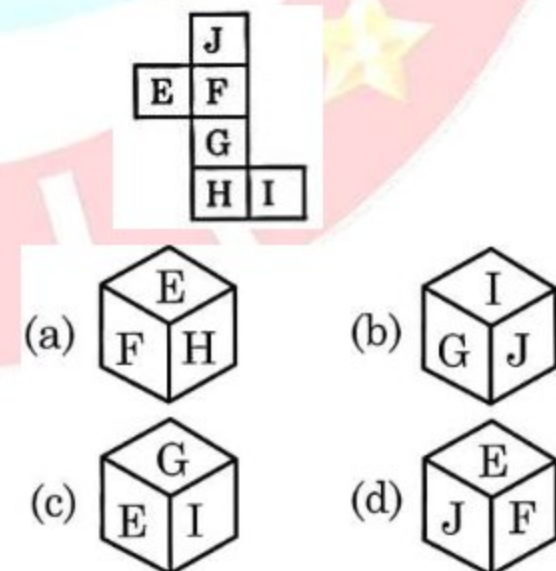


7. Two positions of the same box are shown. What will this box look like when opened?

एक ही बॉक्स की दो स्थितियां को दर्शाया गया है। खोलने पर यह बॉक्स कैसा दिखेगा?



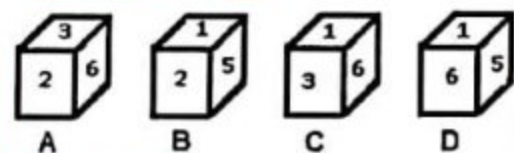
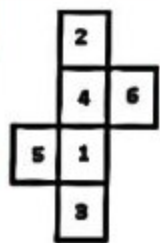
8. From the given options, select the dice which can be formed by folding the sheet given below.



9. Select the dice which can be formed by folding the given sheet along the lines.

उस पासे का चयन करें जो दी गयी शीट को रेखाओं के अनुदिश मोड़कर बनाया जा सकता है।

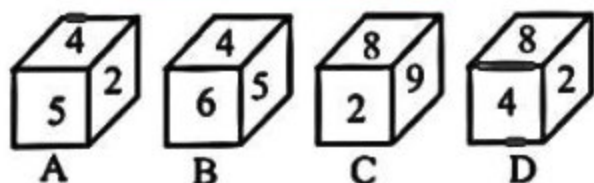
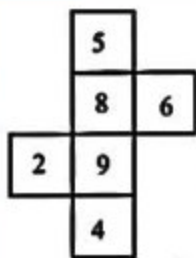
- (a) केवल D
(b) केवल B
(c) केवल A और B
(d) केवल A और C



10. Select the dice which can be obtained by folding the following sheets along the lines.

उस पासे का चयन करें, जिसे निम्नांकित पत्रक (शीट) को रेखाओं पर मोड़ने पर प्राप्त किया जा सकता है।

- (a) केवल C और D
(b) केवल C
(c) B, C और D
(d) केवल D



1.	2.	3.	4.	5.	6.	7.	8.	9.	10.
D	B	D	D	B	D	A	D	D	B